


Name


Date

Apple Subtraction


Solve the subtraction by crossing out the numbers to be subtracted. Write the answers on the line.



$2 - 2 = \underline{\hspace{2cm}}$



$4 - 2 = \underline{\hspace{2cm}}$



$4 - 1 = \underline{\hspace{2cm}}$



$1 - 1 = \underline{\hspace{2cm}}$



$5 - 3 = \underline{\hspace{2cm}}$

